

**NK BAGRODIA GLOBAL SCHOOL**

**SECTOR 17 DWARKA**

**MENTAL MATHS SAMPLE PAPER**

**CLASS 1**

Name: \_\_\_\_\_

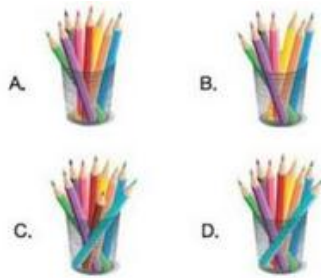
Class: \_\_\_\_\_

Q.1 Which Smiley is 4<sup>th</sup> from the right end?



(i) T (ii) R (iii) S (iv) U

Q2. Which of the following options shows the smallest number of pencils?

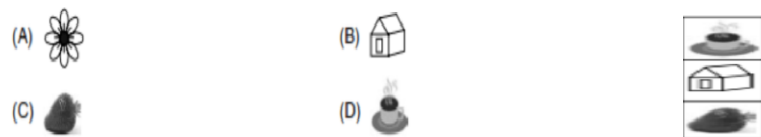


(i) A (ii) B (iii) C (iv) D

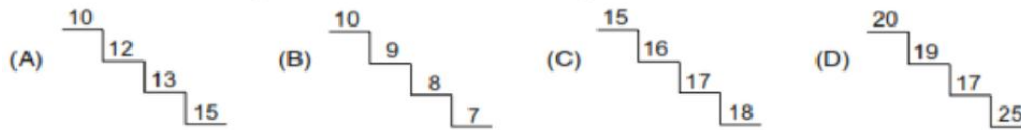
Q3. Complete the given pattern of skip counting.



Q4. Which figure is in the center?



Q5. Which of the following shows a correct ascending order?



Q6. Write the number name of the following.



Q7. Which of the following is a correct match?



Q8. Arrange the following in descending order.



Q9. Elephant \_\_\_\_\_ is just before elephant A.



(i) B (ii) E (iii) C (iv) D

Q10. Which abacus appears correct?

